

Wednesday 24 May 2017 – Afternoon

**GCSE GATEWAY SCIENCE
BIOLOGY B**

B731/02 Biology modules B1, B2, B3 (Higher Tier)

Candidates answer on the Question Paper.
A calculator may be used for this paper.

OCR supplied materials:

None

Other materials required:

- Pencil
- Ruler (cm/mm)

Duration: 1 hour 15 minutes



Candidate forename		Candidate surname	
-----------------------	--	----------------------	--

Centre number						Candidate number				
---------------	--	--	--	--	--	------------------	--	--	--	--

INSTRUCTIONS TO CANDIDATES

- Write your name, centre number and candidate number in the boxes above. Please write clearly and in capital letters.
- Use black ink. HB pencil may be used for graphs and diagrams only.
- Answer **all** the questions.
- Read each question carefully. Make sure you know what you have to do before starting your answer.
- Write your answer to each question in the space provided. If additional space is required, you should use the lined page(s) at the end of this booklet. The question number(s) must be clearly shown.
- Do **not** write in the barcodes.

INFORMATION FOR CANDIDATES



- The quality of written communication is assessed in questions marked with a pencil (✎).
- The number of marks is given in brackets [] at the end of each question or part question.
- The total number of marks for this paper is **75**.
- This document consists of **24** pages. Any blank pages are indicated.

Answer **all** the questions.

SECTION A – Module B1

- 1 The table shows information about the contents of two types of sausage.

All the figures are for **100g** of the sausages.

	Pork sausages 	Vegetarian sausages 
energy in kJ	1200	740
protein in g	10	9
fat in g	22	8
carbohydrate in g	10	13

- (a) A boy has a mass of 50 kg.

- (i) Calculate his estimated average daily requirement (EAR) for protein.

Use this formula to work out your answer.

$$\text{EAR in g} = 0.6 \times \text{body mass in kg}$$

EAR = g

[1]

- (ii) The boy ate 150g of the pork sausages.

What percentage of his EAR would this provide?

answer = %

[2]

(b) Another boy makes two comments about eating vegetarian sausages rather than pork sausages.



I think that eating vegetarian sausages is better overall for your health.

They contain less fat and fat is linked to developing heart disease.

For each of the boy's comments write about whether it contains scientific **facts** or just **opinion**.

.....

.....

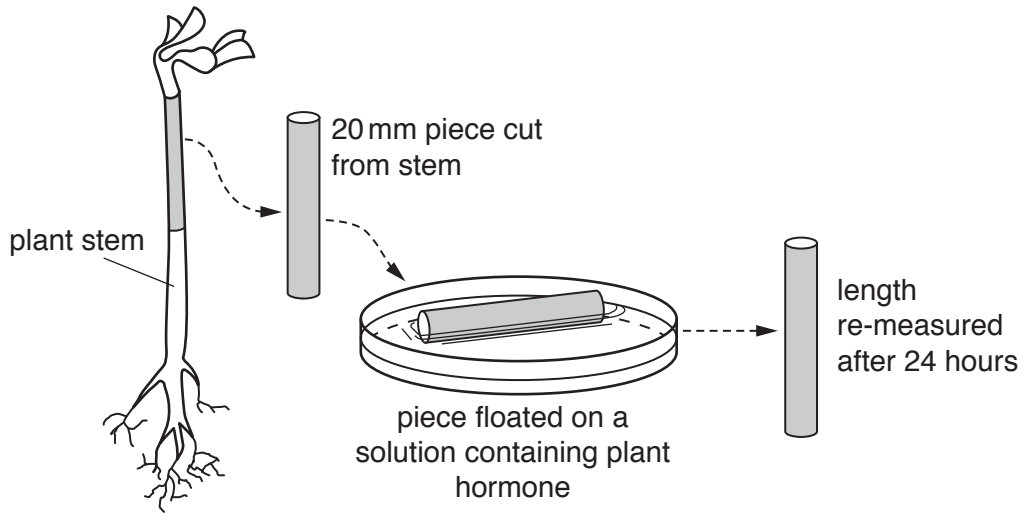
.....

..... [2]

2 Growth in plants is controlled by chemicals called plant hormones.

Students want to measure the effect of a plant hormone on the growth of plant stems.

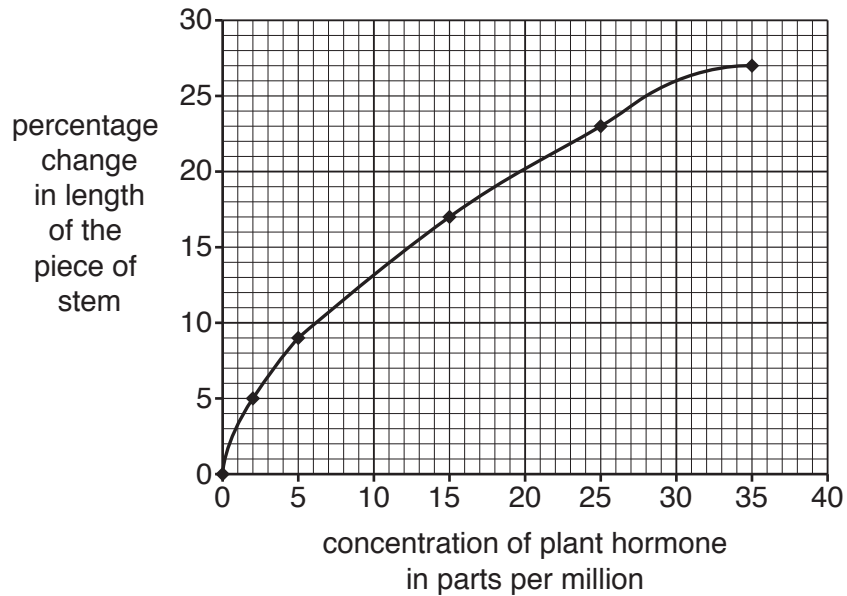
The diagram shows their method.



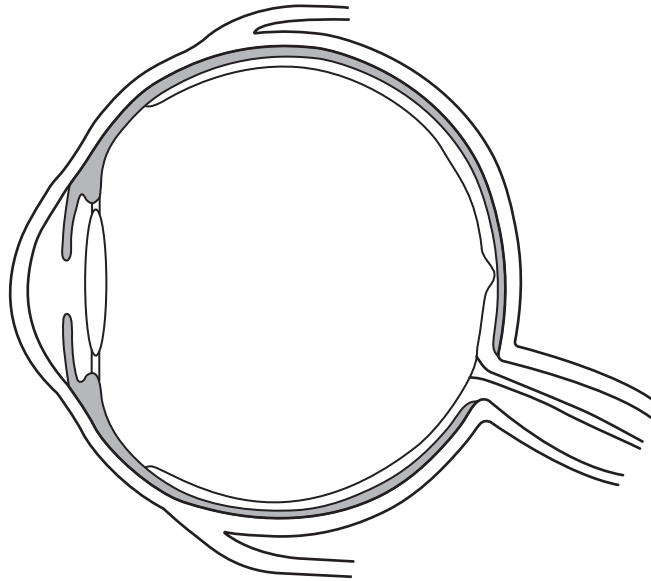
They repeated the experiment with different concentrations of plant hormones.

After 24 hours they worked out the percentage change in length of the stem.

The graph shows their results.



4 The diagram shows a section through the human eye.



(a) Label the diagram with an **X** to show the part of the eye that controls how much light enters the eye. [1]

(b) Some humans and animals have an inherited condition called cornea plana.

It causes the cornea to be less curved than normal.

This can lead to long-sight in humans.

Explain why cornea plana causes long-sight in humans.

.....

.....

..... [2]

(c) Scientists performed an experiment on mice to try and work out how cornea plana is inherited.

They mated together two mice who had normal vision.

There were nine offspring and three had cornea plana.

Complete these sentences about the inheritance of cornea plana.

Cornea plana is caused by a change to a gene.

A change in a gene is called a

The allele that is produced is to the normal allele.

The two parent mice must be for the allele for cornea plana.

[3]

- 5 There are different types of fitness and various tests that can be used to measure them.

The table gives some information about these tests.

Type of fitness	Example of test used
.....	how fast a person can run zig-zagging between cones
.....	how far a person can stand from a wall and bend forward to touch the wall with their knees
strength	how much force a person can exert when gripping a machine with their right hand
speed	how fast a person can sprint 60 metres

- (a) Complete the table by adding the two missing types of fitness. Use words from this list.

agility

flexibility

stamina

[1]

- (b) Suggest **one** disadvantage of describing a person's **strength** by using the method in the table.

..... [1]

BLANK PAGE

PLEASE DO NOT WRITE ON THIS PAGE

SECTION B – Module B2

6 Nitrogen is an element found in living organisms.

Read this article about nitrogen and plants.

Nitrogen – the farmers’ friend

Plants are surrounded by plenty of nitrogen gas in the air but cannot use it.

The main way they get nitrogen is from the soil.

Plants need nitrogen for growth.

When farmers harvest their crops they often dig the remains of the plant into the soil.

The decomposition of the plant remains will provide nitrates for next year’s crop.

(a) Why is nitrogen needed for plant growth?

..... [1]

(b) Explain how the decomposition of dead plants in the soil provides nitrates for next year’s crop.

.....
.....
.....
..... [3]

(c) The table shows the amount of nitrogen which entered crops in three different countries in one year.

	Amount of nitrogen entering crops in millions of tons per year		
Source of nitrogen	Australia	India	USA
fixed by bacteria in root nodules	13.9	1.6	11.3
other sources	3.5	2.0	8.7
total	17.4	3.6	20.0

(i) The percentage of nitrogen entering crops due to bacteria in root nodules is **79.9%** in Australia and **56.5%** in USA.

Calculate the percentage of nitrogen entering crops in India that is due to bacteria in root nodules.

answer % [2]

(ii) Which country grows the **lowest** proportion of peas or beans as crops?

Explain your answer.


.....

.....


.....

..... [3]

7 Snowshoe hares live in northern Canada where there is snow on the ground for much of the year. Jackrabbits live in the hot deserts of Mexico.



snowshoe hare



jackrabbit

(a) The snowshoe hare and jackrabbit have different coloured fur for camouflage in their different habitats.

Explain one **other** way they are adapted to their habitats seen in the pictures.

.....

.....

.....

..... [3]

- (b) Snowshoe hares are preyed on by animals called lynx.
Scientists have made observations to explain why snowshoe hares have white fur.

Here are their observations.

- A** Hares are all born with slightly different coloured fur.
- B** Lynx are trying to find food and hares are trying not to be eaten.
- C** The hares with the fur colour best suited to the conditions survive.
- D** The hares that survive pass on their genes for fur colour.

Charles Darwin made observations about natural selection.

Match the scientists' observations to Charles Darwin's observations by writing the correct letter **A**, **B**, **C** and **D** in the table.

Charles Darwin's observation	Scientists' observation
survival of the fittest	
competition for resources	
inheritance of successful adaptations	
presence of natural variation	

[2]

15
BLANK PAGE

PLEASE DO NOT WRITE ON THIS PAGE

8 The diagram shows two types of ladybird.



7 spotted ladybird
Coccinella septempunctata



Harlequin ladybird
Harmonia axyridis

(a) All ladybirds are arthropods.

Put a tick (✓) next to the correct comparison of the classification of the two types of ladybirds.

They are classified in ...

... the **same** class, genus and species.

... a **different** class, genus and species.

... the **same** class and genus but **different** species

... the **same** class but **different** genus and species

[1]

(b) Ladybirds may get their common name from the fact that they can fly.

The Ancient Greeks might have classified ladybirds in the same group as birds.

(i) What name is given to the type of classification system used by the Ancient Greeks?

..... [1]

(ii) Give **one** reason why this type of system is not used now.

.....

 [1]

(c) Harry has been looking at the ladybirds on a bush in his garden.

He knows that there are three main types of ladybird living in the area.

The three main types of ladybird can have different numbers of spots on their body.

Type of ladybird	Number of spots on the body
harlequin	15–21
eyed	15
7 spotted	7

Harry is talking to two of his friends.

Harry
The mean (average) on the bush is 15 spots per ladybird so they must all be eyed ladybirds.

Tom
If that mean is correct then there could still be an equal spread of all three types of ladybird on the bush.

Sam
That mean shows that there could be some 7 spotted ladybirds on the bush but not many of them.

Which friend’s answer is correct?

Explain your answer.

.....

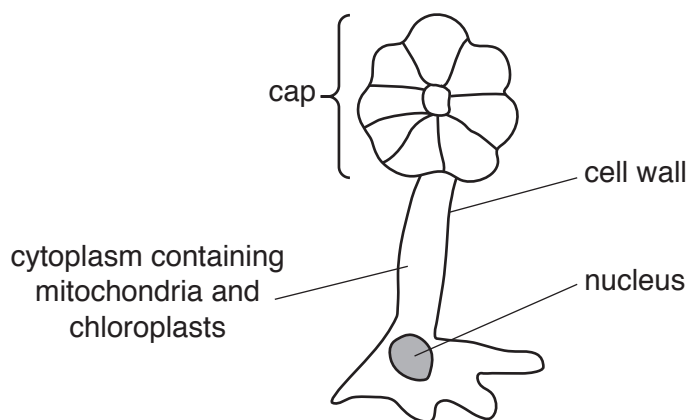
.....

..... [2]

SECTION C – Module B3

9 (a) *Acetabularia* is a unicellular organism that lives in the sea.

It has rather an unusual shape.



(i) Write down **two** features shown in the diagram of *Acetabularia* that tell you that it is **not** a bacterium.

1

2

[2]

(ii) *Acetabularia* is one of the largest unicellular organisms.

To be larger, organisms need to be multicellular.

What is an advantage of being larger and multicellular?

Put a tick (✓) next to the **correct** answer.

Some genes can be lost from some cells.

Both aerobic and anaerobic respiration can occur.

Cells are able to differentiate and specialise.

Organisms are able to clone themselves.

[1]

(iii) To become multicellular, specialised organ systems may be needed.

Write down **one** of these systems and explain why it is needed.

.....

.....

..... [1]

10 A farmer is choosing which strawberry plants to grow.

He reads an advert in his farming magazine.

Buy strawberry plants from us!



We have been selectively breeding strawberry plants for many years.
This produced a plant with very sweet tasting strawberries.
All the plants we now sell are clones of this plant.
We guarantee that none of the plants we sell are genetically modified.

(a) The strawberry plants sold by the company are all clones.

Write about the **disadvantages** of a farmer only growing this one type of strawberry plant.

.....
.....
.....
.....
..... [2]

(b) The plant company say that none of their plants are genetically modified.

Suggest **two** reasons why the company wants to let people know this.

.....
.....
..... [2]

11 A student answered two questions in a biology test.

Both his answers contain mistakes.

Explain the student's mistakes in each answer.

(a) Question one: Write down three examples of proteins.

Student's answer: amino acids, collagen, insulin

Student's mistake
.....
.....
..... [2]

(b) Question two: How do enzymes work?

Student's answer: An enzyme is like a key that fits into a substrate's active site.

Student's mistake
.....
.....
..... [2]

12 The table shows some information about three types of mammal.

Mammal	Metabolic rate	Surface area of one red blood cell in arbitrary units	Volume of one red blood cell in arbitrary units	Surface area to volume ratio of red blood cells
Mouse	1.0	91	52	1.75
Rabbit	1.5	114	70	1.63
Shrew	7.5	60	24	

(a) The units for the metabolic rate are cm^3 of oxygen consumed in one hour per gram of animal.

(i) Suggest why the oxygen consumed is given as **per gram of animal**?

.....
 [1]

(ii) Explain why oxygen consumption can be used as a measure of metabolic rate.

.....

 [2]

(b) (i) Calculate the surface area to volume ratio of red blood cells for the shrew.

answer = [1]

(ii) Explain how the shrew manages to maintain its metabolic rate.

Use your calculation in part (b)(i) and information from the table in your answer.

.....

 [3]

END OF QUESTION PAPER

ADDITIONAL ANSWER SPACE

If additional space is required, you should use the following lined page(s). The question number(s) must be clearly shown in the margin(s).

A large area of lined paper for writing. It features a vertical solid line on the left side, creating a margin. The rest of the page is filled with horizontal dotted lines, providing space for writing answers.

A large rectangular area with a solid vertical line on the left side and horizontal dotted lines extending across the page, providing a grid for writing answers.



Copyright Information

OCR is committed to seeking permission to reproduce all third-party content that it uses in its assessment materials. OCR has attempted to identify and contact all copyright holders whose work is used in this paper. To avoid the issue of disclosure of answer-related information to candidates, all copyright acknowledgements are reproduced in the OCR Copyright Acknowledgements Booklet. This is produced for each series of examinations and is freely available to download from our public website (www.ocr.org.uk) after the live examination series.

If OCR has unwittingly failed to correctly acknowledge or clear any third-party content in this assessment material, OCR will be happy to correct its mistake at the earliest possible opportunity.

For queries or further information please contact the Copyright Team, First Floor, 9 Hills Road, Cambridge CB2 1GE.

OCR is part of the Cambridge Assessment Group; Cambridge Assessment is the brand name of University of Cambridge Local Examinations Syndicate (UCLES), which is itself a department of the University of Cambridge.