

Wednesday 18 May 2016 – Morning

AS GCE MATHEMATICS (MEI)

4751/01 Introduction to Advanced Mathematics (C1)

QUESTION PAPER

Candidates answer on the Printed Answer Book.

OCR supplied materials:

- Printed Answer Book 4751/01
- MEI Examination Formulae and Tables (MF2)

Other materials required:

None

Duration: 1 hour 30 minutes



INSTRUCTIONS TO CANDIDATES

These instructions are the same on the Printed Answer Book and the Question Paper.

- The Question Paper will be found inside the Printed Answer Book.
- Write your name, centre number and candidate number in the spaces provided on the Printed Answer Book. Please write clearly and in capital letters.
- **Write your answer to each question in the space provided in the Printed Answer Book.** Additional paper may be used if necessary but you must clearly show your candidate number, centre number and question number(s).
- Use black ink. HB pencil may be used for graphs and diagrams only.
- Read each question carefully. Make sure you know what you have to do before starting your answer.
- Answer **all** the questions.
- Do **not** write in the bar codes.
- You are **not** permitted to use a calculator in this paper.
- Final answers should be given to a degree of accuracy appropriate to the context.

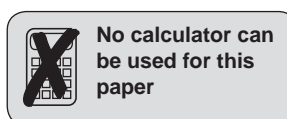
INFORMATION FOR CANDIDATES

This information is the same on the Printed Answer Book and the Question Paper.

- The number of marks is given in brackets [] at the end of each question or part question on the Question Paper.
- You are advised that an answer may receive **no marks** unless you show sufficient detail of the working to indicate that a correct method is being used.
- The total number of marks for this paper is **72**.
- The Printed Answer Book consists of **12** pages. The Question Paper consists of **4** pages. Any blank pages are indicated.

INSTRUCTION TO EXAMS OFFICER/INVIGILATOR

- Do not send this Question Paper for marking; it should be retained in the centre or recycled. Please contact OCR Copyright should you wish to re-use this document.



Section A (36 marks)

- 1 Find the value of each of the following.
- (i) 3^0 [1]
 - (ii) $9^{\frac{3}{2}}$ [2]
 - (iii) $\left(\frac{4}{5}\right)^{-2}$ [2]
- 2 Find the coordinates of the point of intersection of the lines $2x + 3y = 12$ and $y = 7 - 3x$. [4]
- 3 (i) Solve the inequality $\frac{1-2x}{4} > 3$. [2]
- (ii) Simplify $(5c^2d)^3 \times \frac{2c^4}{d^5}$. [2]
- 4 You are given that $a = \frac{3c+2a}{2c-5}$. Express a in terms of c . [4]
- 5 (i) Express $\sqrt{50} + 3\sqrt{8}$ in the form $a\sqrt{b}$, where a and b are integers and b is as small as possible. [2]
- (ii) Express $\frac{5+2\sqrt{3}}{4-\sqrt{3}}$ in the form $c+d\sqrt{3}$, where c and d are integers. [3]
- 6 Find the binomial expansion of $(1 - 5x)^4$, expressing the terms as simply as possible. [4]
- 7 (i) Solve the equation $(x - 2)^2 = 9$. [2]
- (ii) Sketch the curve $y = (x - 2)^2 - 9$, showing the coordinates of its intersections with the axes and its turning point. [3]
- 8 You are given that $f(x) = x^3 + ax + c$ and that $f(2) = 11$. The remainder when $f(x)$ is divided by $(x + 1)$ is 8. Find the values of a and c . [5]

Section B (36 marks)

- 9 Fig. 9 shows the curves $y = \frac{1}{x+2}$ and $y = x^2 + 7x + 7$.

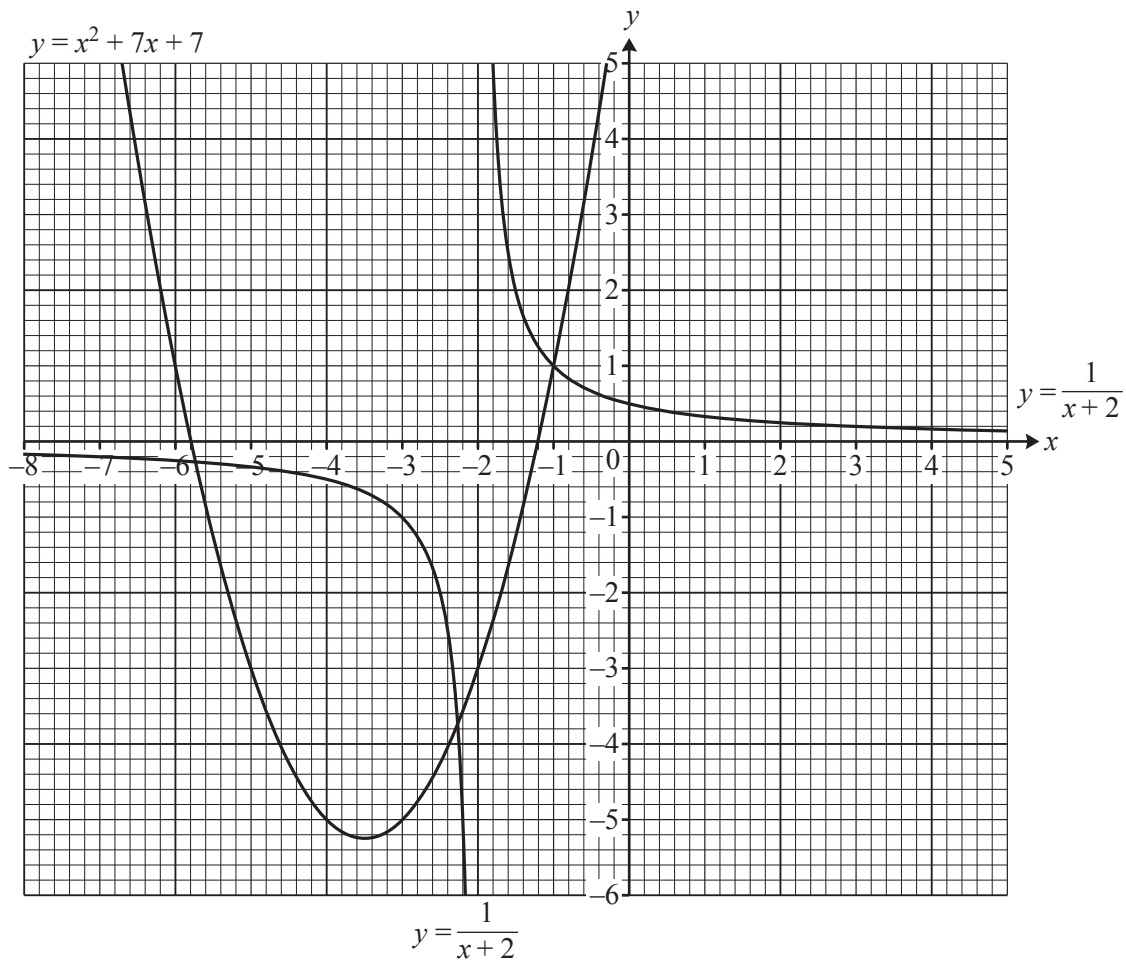


Fig. 9

- (i) Use Fig. 9 to estimate graphically the roots of the equation $\frac{1}{x+2} = x^2 + 7x + 7$. [2]
- (ii) Show that the equation in part (i) may be simplified to $x^3 + 9x^2 + 21x + 13 = 0$. Find algebraically the exact roots of this equation. [7]
- (iii) The curve $y = x^2 + 7x + 7$ is translated by $\begin{pmatrix} 3 \\ 0 \end{pmatrix}$.
- (A) Show graphically that the translated curve intersects the curve $y = \frac{1}{x+2}$ at only one point. Estimate the coordinates of this point. [2]
- (B) Find the equation of the translated curve, simplifying your answer. [2]

10 Fig. 10 shows a sketch of the points A (2, 7), B (0, 3) and C (8, -1).

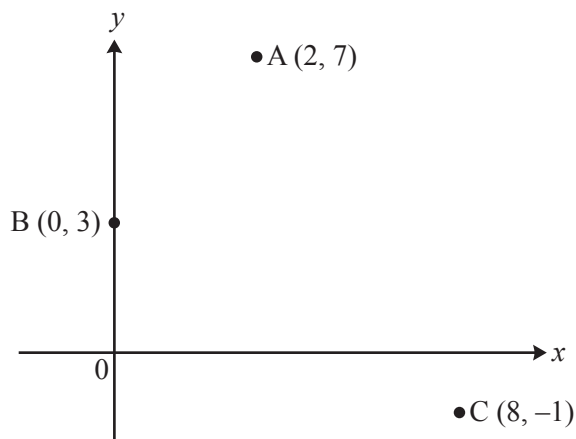


Fig. 10

- (i) Prove that angle ABC is 90° . [3]
- (ii) Find the equation of the circle which has AC as a diameter. [4]
- (iii) Find the equation of the tangent to this circle at A. Give your answer in the form $ay = bx + c$, where a , b and c are integers. [4]
- 11 (i) Find the coordinates of the points of intersection of the curve $y = 2x^2 - 5x - 3$ with the axes. [3]
- (ii) Find the coordinates of the points of intersection of the curve $y = 2x^2 - 5x - 3$ and the line $y = x + 3$. [4]
- (iii) Find the set of values of k for which the line $y = x + k$ does not intersect the curve $y = 2x^2 - 5x - 3$. [5]

END OF QUESTION PAPER

OCR
Oxford Cambridge and RSA

Copyright Information

OCR is committed to seeking permission to reproduce all third-party content that it uses in its assessment materials. OCR has attempted to identify and contact all copyright holders whose work is used in this paper. To avoid the issue of disclosure of answer-related information to candidates, all copyright acknowledgements are reproduced in the OCR Copyright Acknowledgements Booklet. This is produced for each series of examinations and is freely available to download from our public website (www.ocr.org.uk) after the live examination series. If OCR has unwittingly failed to correctly acknowledge or clear any third-party content in this assessment material, OCR will be happy to correct its mistake at the earliest possible opportunity.

For queries or further information please contact the Copyright Team, First Floor, 9 Hills Road, Cambridge CB2 1GE.

OCR is part of the Cambridge Assessment Group; Cambridge Assessment is the brand name of University of Cambridge Local Examinations Syndicate (UCLES), which is itself a department of the University of Cambridge.