

OCR

Oxford Cambridge and RSA

Wednesday 16 May 2018 – Morning

AS GCE MATHEMATICS (MEI)

4751/01 Introduction to Advanced Mathematics (C1)

QUESTION PAPER

Candidates answer on the Printed Answer Book.


OCR supplied materials:

- Printed Answer Book 4751/01
- MEI Examination Formulae and Tables (MF2)

Other materials required:

None

Duration: 1 hour 30 minutes



INSTRUCTIONS TO CANDIDATES

These instructions are the same on the Printed Answer Book and the Question Paper.

- The Question Paper will be found inside the Printed Answer Book.
- Write your name, centre number and candidate number in the spaces provided on the Printed Answer Book. Please write clearly and in capital letters.
- **Write your answer to each question in the space provided in the Printed Answer Book.** If additional space is required, you should use the lined page(s) at the end of this booklet. The question number(s) must be clearly shown.
- Use black ink. HB pencil may be used for graphs and diagrams only.
- Read each question carefully. Make sure you know what you have to do before starting your answer.
- Answer **all** the questions.
- Do **not** write in the barcodes.
- You are **not** permitted to use a calculator in this paper.
- Final answers should be given to a degree of accuracy appropriate to the context.

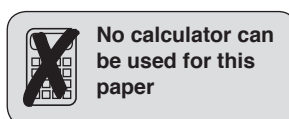
INFORMATION FOR CANDIDATES

This information is the same on the Printed Answer Book and the Question Paper.

- The number of marks is given in brackets [] at the end of each question or part question on the Question Paper.
- You are advised that an answer may receive **no marks** unless you show sufficient detail of the working to indicate that a correct method is being used.
- The total number of marks for this paper is **72**.
- The Printed Answer Book consists of **12** pages. The Question Paper consists of **4** pages. Any blank pages are indicated.

INSTRUCTION TO EXAMS OFFICER/INVIGILATOR

- Do not send this Question Paper for marking; it should be retained in the centre or recycled. Please contact OCR Copyright should you wish to re-use this document.



No calculator can
be used for this
paper

Section A (36 marks)

- 1 Simplify $(5a^2c)^3 \times 2a^4c^{-5}$. [2]
- 2 Find the equation of the line joining the points $(-1, 9)$ and $(2, -3)$, giving your answer in the form $y = mx + c$. State the coordinates of the points where this line intersects the axes. [5]
- 3 Find the value of
- (i) $(2\frac{1}{4})^{-2}$, [2]
- (ii) $(8000)^{\frac{2}{3}}$. [2]
- 4 For the following equation, express x in terms of y .
- $$\frac{x}{3y} = \frac{2x+1}{y+2}$$
- [4]
- 5 Find the coordinates of the point of intersection of the lines $y = 4x + 3$ and $3x + 2y = 9$. [4]
- 6 Find the term that is independent of x in the binomial expansion of $(\frac{1}{x} - 3x)^6$. [3]
- 7 (i) Express $\sqrt{28} + 3\sqrt{175}$ in the form $a\sqrt{b}$, where a and b are integers and b is as small as possible. [2]
- (ii) Simplify $\frac{6}{5-\sqrt{2}} - \frac{3\sqrt{2}}{5+\sqrt{2}}$, giving your answer in the form $\frac{a+b\sqrt{2}}{c}$, where a , b and c are integers. [3]
- 8 For each of the following pairs of sentences A and B, give a reason why the statement $A \Leftrightarrow B$ is false and write either ' $A \Rightarrow B$ ' or ' $A \Leftarrow B$ ' to show the correct relationship.
- (i) A: n is positive.
B: $n^2 + 6$ is positive. [2]
- (ii) A: The diagonals of a quadrilateral bisect each other but not at right angles.
B: The quadrilateral is a rectangle but not a square. [2]
- 9 You are given that $f(x) = ax^3 + cx$ and that $f(-1) = 3$. You are also given that when $f(x)$ is divided by $(x - 4)$, the remainder is 108. Find the values of a and c . [5]

Section B (36 marks)

- 10 (i) Express $3x^2 - 9x + 5$ in the form $a(x + b)^2 + c$. Hence state the equation of the line of symmetry and the y -coordinate of the minimum point of the curve with equation $y = 3x^2 - 9x + 5$. [6]
- (ii) Find the coordinates of the points where the graph of $y = 3x^2 - 9x + 5$ intersects the axes. Give your answers in an exact form. Hence state the solution of the inequality $3x^2 - 9x + 5 < 0$. [4]
- 11 You are given that $f(x) = (2x + 5)(x^2 - 5x + 4)$.
- (i) Sketch the graph of $y = f(x)$. [4]
- (ii) You are given that $g(x) = 2x^3 - 5x^2 - 17x + 48$. Show that $x = -3$ is a root of $g(x) = 0$ and that it is the only real root. [6]
- (iii) Show that $y = g(x)$ is a translation of $y = f(x)$ by $\begin{pmatrix} 0 \\ k \end{pmatrix}$, finding the value of k . [3]

12

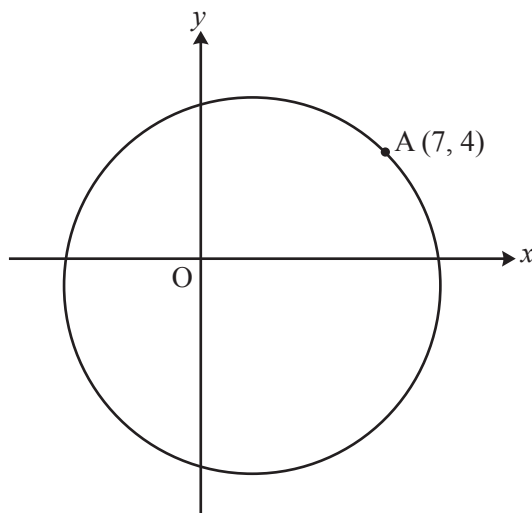


Fig. 12

Fig. 12 shows a sketch of the circle with equation $(x - 2)^2 + (y + 1)^2 = 50$. You are given that the point A (7, 4) lies on the circle.

- (i) Write down the radius of this circle and the coordinates of its centre. [2]
- (ii) The line L has equation $y = 2x - 10$ and passes through the point A (7, 4). Use algebra to find the coordinates of the point B where the line L meets the circle again. Hence show that the perpendicular distance from the centre of the circle to the line L is $\sqrt{5}$. [6]
- (iii) Show that, when the line $y = 2x + k$ is a tangent to the circle, k satisfies the equation

$$k^2 + 10k - 225 = 0. \quad [5]$$

END OF QUESTION PAPER

**Copyright Information**

OCR is committed to seeking permission to reproduce all third-party content that it uses in its assessment materials. OCR has attempted to identify and contact all copyright holders whose work is used in this paper. To avoid the issue of disclosure of answer-related information to candidates, all copyright acknowledgements are reproduced in the OCR Copyright Acknowledgements Booklet. This is produced for each series of examinations and is freely available to download from our public website (www.ocr.org.uk) after the live examination series.

If OCR has unwittingly failed to correctly acknowledge or clear any third-party content in this assessment material, OCR will be happy to correct its mistake at the earliest possible opportunity.

For queries or further information please contact the Copyright Team, First Floor, 9 Hills Road, Cambridge CB2 1GE.

OCR is part of the Cambridge Assessment Group; Cambridge Assessment is the brand name of University of Cambridge Local Examinations Syndicate (UCLES), which is itself a department of the University of Cambridge.