

ADVANCED SUBSIDIARY GCE
CHEMISTRY B (SALTERS)
Chemistry of Natural Resources

F332/TEST

Candidates answer on the question paper

OCR Supplied Materials:


- *Data Sheet for Chemistry B (Salters)* (inserted)
- *Advance Notice: 'Earth-Venus-Mars'* (inserted)

Other Materials Required:

- Scientific calculator

Monday 7 June 2010
Morning

Duration: 1 hour 45 minutes




Candidate Forename		Candidate Surname	
--------------------	--	-------------------	--

Centre Number							Candidate Number				
---------------	--	--	--	--	--	--	------------------	--	--	--	--

INSTRUCTIONS TO CANDIDATES

- Write your name clearly in capital letters, your Centre Number and Candidate Number in the boxes above.
- Use black ink. Pencil may be used for graphs and diagrams only.
- Read each question carefully and make sure that you know what you have to do before starting your answer.
- Answer **all** the questions.
- Do **not** write in the bar codes.
- Write your answer to each question in the space provided. Additional paper may be used if necessary but you must clearly show your Candidate Number, Centre Number and question number(s).

INFORMATION FOR CANDIDATES

- The number of marks is given in brackets [] at the end of each question or part question.
-  Where you see this icon you will be awarded marks for the quality of written communication in your answer.
This means for example you should:
 - ensure that text is legible and that spelling, punctuation and grammar are accurate so that meaning is clear;
 - organise information clearly and coherently, using specialist vocabulary when appropriate.
- You may use a scientific calculator.
- The insert '*Earth-Venus-Mars*' is provided for use with question 5.
- A copy of the *Data Sheet for Chemistry B (Salters)* is provided as an insert with this question paper.
- You are advised to show all the steps in any calculations.
- The total number of marks for this paper is **100**.
- This document consists of **16** pages. Any blank pages are indicated.

Answer **all** the questions.

- 1 Iodine can be extracted from some types of seaweed which have taken up iodine compounds from the seawater. Iodine is present in seawater, as both iodide, I^- , and iodate, IO_3^- , ions.

- (a) Give the oxidation state of iodine in I^- and IO_3^- .

I^- IO_3^- [2]

- (b) Iodate ions can be converted to iodide ions by reacting them with a solution of sulfur dioxide. The reaction that occurs is represented by **equation 1.1**.



- (i) Which element has been oxidised in the reaction represented by **equation 1.1**?

..... [1]

- (ii) A solution contains IO_3^- ions at a concentration of 0.15 mol dm^{-3} .

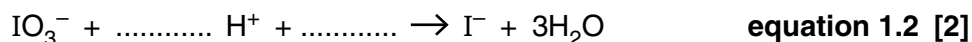
Calculate the concentration of IO_3^- ions in the solution in g dm^{-3} .

Give your answer to **two** significant figures.

M_r : IO_3^- , 174.9

concentration = g dm^{-3} [2]

- (iii) **Equation 1.2** is the incomplete half-equation for the conversion of iodate ions to iodide ions. Complete and balance **equation 1.2**.

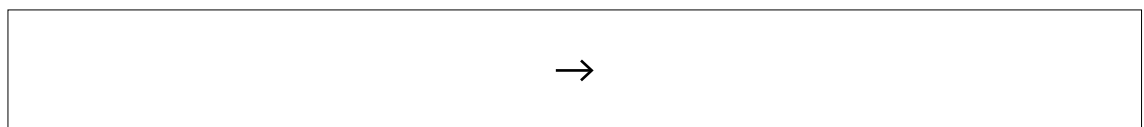


- (c) When silver nitrate solution is added to a solution containing iodide ions, a reaction occurs.

- (i) What would be **seen** when this reaction occurs?

.....
 [2]

- (ii) Write the ionic equation for the reaction, including state symbols.



[2]

- (d) Iodine, I₂, can be obtained by burning seaweed. The intermolecular bond between the iodine molecules is instantaneous dipole–induced dipole.

Explain how this type of intermolecular bond forms.

.....

.....

.....

.....

.....

.....

.....

..... [3]

- (e) Iodine and chlorine are both members of the halogen group.

- (i) Write the electron configuration for chlorine in terms of s and p sub-shells.
..... [2]

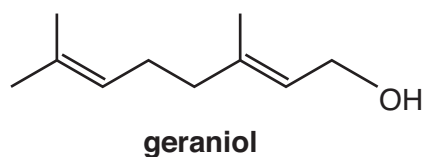
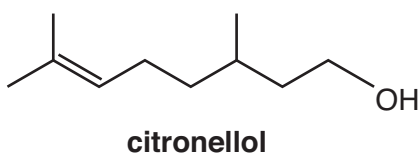
- (ii) Write the electron configuration for the highest energy sub-shell for iodine. (For example, for lead it would be 6p²).
..... [1]

- (iii) Chlorine atoms are more readily reduced than iodine atoms.
State what is meant by *reduction* in terms of electrons.
..... [1]

- (iv) Using your answers to (i), (ii) and (iii), suggest why chlorine atoms are more readily reduced than iodine atoms.
.....
-
-
-
-
-
-
-
-
- [2]

[Total: 20]

- 2 Rose oil, which is extracted from rose petals to use in perfumes, consists of a mixture of chemicals. The skeletal formulae of two of the chemicals, citronellol and geraniol, are shown below.

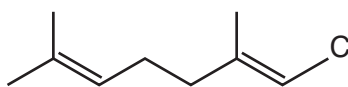


- (a) Give the molecular formula of **citronellol**.
 [2]
- (b) Name the **two** functional groups that are present in **both** citronellol and geraniol.

 [2]
- (c) Classify the OH groups in citronellol and geraniol as primary, secondary or tertiary.
 Explain your answer.

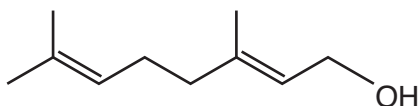
 [2]
- (d) The OH group in geraniol can be oxidised by heating the geraniol under reflux with appropriate reagents.
- (i) Give the reagents that would be required in order for this oxidation to occur.

 [2]
- (ii) Describe the colour change you would see during the reaction.
 from to [2]
- (iii) **Name** the new functional group that forms.
 [1]
- (iv) Complete the diagram below to show the full structural formula of the oxidised group that would form from geraniol.



[1]

- (e) Geraniol can exhibit *E/Z* isomerism due to the structure of the molecule around the C=C nearest to the OH group. One isomer is shown below.



- (i) Draw the skeletal formula of the other isomer.

[2]

- (ii) Explain why there are no *E/Z* isomers arising from the C=C at the other end of the molecule.

.....

 [1]

- (f) A student adds bromine water drop by drop to 1 cm³ of geraniol in a test tube. The tube is shaken after each addition. The addition of bromine water is continued until no further change occurs. In a second experiment, the student repeats the process with an equal volume of citronellol.

- (i) Describe and explain the **similarities** the student would observe between the two experiments.

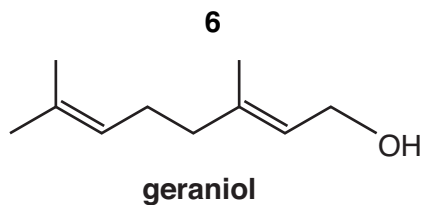
.....

 [3]

- (ii) Describe and explain the **difference** the student would observe between the two experiments.

.....

 [2]



- (iii) Give the **skeletal** formula of the product that forms from the reaction of geraniol with bromine.

[2]

- (iv) Classify the reaction of bromine with citronellol by underlining **two** words from the following list.

addition electrophilic nucleophilic radical substitution [2]

[Total: 24]

- 3 A lightning strike provides energy to start reactions between chemicals present in the atmosphere. One possible reaction sequence involving gaseous substances is shown below.



- (a) The reactions represented by **equations 3.1** and **3.2** involve the formation of oxides of nitrogen.

Give an example of a human activity that gives rise to oxides of nitrogen.

.....
 [1]

- (b) Some of the species involved in the reactions shown in the equations above are radicals.

(i) Circle **one** substance in the list below that represents the formula of a radical.

HNO₃ N₂ NO [1]

(ii) Explain your answer to (i).

.....
 [1]

(iii) NO₂ and OH are also radicals. Give the name that is used to describe the type of radical reaction illustrated by **equation 3.4**.

..... [1]

- (c) The reaction represented by **equation 3.4** has a low activation enthalpy.

(i) Suggest why this reaction has a low activation enthalpy.

.....
 [1]

(ii) Suggest why, even though this reaction has a low activation enthalpy, it still occurs slowly in the atmosphere.

.....
 [1]

- (iii) Describe and explain how the rate of a reaction varies under different temperature conditions.



In your answer, you should make clear how the points you make are linked to one another.

.....

.....

.....

.....

.....

.....

.....

.....

..... [5]

- (d) **Equations 3.2** and **3.3** represent the process in which NO reacts with ozone in the stratosphere.



- (i) Combine **equations 3.2** and **3.3** to produce the overall equation for the process.

[1]

- (ii) Explain how **equations 3.2** and **3.3** show that NO could be a catalyst for the breakdown of ozone.

.....

..... [1]

- (iii) In this process NO is a homogeneous catalyst.

Explain what is meant by the term *homogeneous*.

.....

.....

..... [1]

(iv) Explain why a reaction is faster in the presence of a catalyst.

.....
.....
..... [2]

(e) Ozone is present in both the stratosphere and the troposphere.

(i) Explain how the presence of ozone in the **stratosphere** benefits us.

.....
.....
.....
.....
..... [3]

(ii) Give **one** disadvantage of a build-up of **tropospheric** ozone.

.....
..... [1]

[Total: 20]

- 4 Chlorofluorocarbons, CFCs, have been used for a variety of applications, including as blowing agents for plastics. Since the discovery that CFCs cause environmental damage, alternative compounds have been used.

(a) The table below gives data for some compounds that could be used in place of CFCs. ODP is the Ozone Depletion Potential.

compound	formula	boiling point /K	flammable	ODP	price
A	CFCl_3	297	no	1.0	medium
B	CF_2Cl_2	243	no	1.0	medium
C	$\text{CF}_3\text{CCl}_2\text{H}$	302	no	0.02	high
D	$\text{CF}_3\text{CH}_2\text{F}$	247	no	0.0	very high
E	$\text{CH}_3\text{CH}_2\text{CH}_3$	231	yes	0.0	low

- (i) Give the systematic name of **compound D**.

..... [2]

- (ii) CFCs were used as blowing agents for plastics like expanded polystyrene. The CFC was incorporated into the plastic as it was being produced. The CFC vaporised during the polymerisation reaction, so it 'blew' tiny bubbles in the plastic.

Use data from the table to suggest **one** advantage and **one** disadvantage of **compound C** as a replacement for **compound A** as a blowing agent.

advantage:

.....

disadvantage:

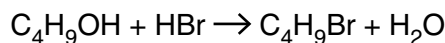
..... [2]

- (iii) Chemicals used as refrigerants need to be volatile. **Compound B** has been used as a refrigerant because it has a suitable volatility.

Suggest from the list in the table, **one** substance of similar volatility to be a suitable replacement for **compound B** as a refrigerant.

..... [1]

- (b) A student decided to make the halogenoalkane 1-bromobutane, C_4H_9Br , by reacting butan-1-ol, C_4H_9OH , with hydrobromic acid.



The student wanted to make at least 5 g of 1-bromobutane. Research shows that the reaction typically produces a 45% yield.

- (i) Calculate the relative molecular masses of butan-1-ol and 1-bromobutane.

$$M_r: C_4H_9OH = \dots\dots\dots$$

$$M_r: C_4H_9Br = \dots\dots\dots \quad [1]$$

- (ii) Calculate the mass of butan-1-ol that would be needed to produce 5.0 g of 1-bromobutane if the reaction produces a 100% yield.

$$\text{mass of butan-1-ol} = \dots\dots\dots \text{ g} \quad [2]$$

- (iii) Calculate the mass of butan-1-ol that would be needed to produce 5.0 g of 1-bromobutane if the reaction produces a 45% yield.

$$\text{mass of butan-1-ol} = \dots\dots\dots \text{ g} \quad [1]$$

- (c) The reaction was carried out by heating the mixture of butan-1-ol and hydrobromic acid under reflux for 30 minutes.

- (i) Describe how you would carry out the process of heating under reflux in the laboratory.

.....
 [1]

- (ii) Suggest **two** reasons why *heating under reflux* is used for this reaction.

.....

 [2]

(d) After heating under reflux, the mixture was allowed to cool. The 1-bromobutane was separated from the mixture and dried. 1-Bromobutane is a liquid that is more dense than water and immiscible in water.

(i) Describe how the 1-bromobutane layer can be separated from the aqueous layer.

.....
.....
..... [2]

(ii) Give the name of a suitable drying agent for the 1-bromobutane.

.....
..... [1]

(iii) The 1-bromobutane is contaminated with another organic liquid.

Name the process you would use to separate these two liquids.

..... [1]

[Total: 16]

5 This question is based on the Advance Notice article '*Earth-Venus-Mars*' which is provided as an insert to this paper.

(a) Explain what is meant by *ultraviolet dissociation* of a molecule and how it occurs. Give an example from the article to support your explanation. Name the **type** of bond fission that is occurring.



In your answer, you should use appropriate technical terms, spelled correctly.

.....
.....
.....
.....
..... [4]

(b) Calculate how many times as much nitrogen gas there is near the surface of Venus than there is near the surface of the Earth.

answer = times as much [2]

(c) The article says that, on Venus, some of the carbon dioxide was 'baked out of the rocks'.

Suggest an explanation, in chemical terms, of the meaning of 'baking carbon dioxide out of the rocks'.

.....
.....
.....
..... [2]

(d) Explain how carbon dioxide in the atmosphere absorbs infrared radiation.

.....
.....
.....
..... [2]

(e) Infrared spectroscopy can be used to show that a sample of air contains water vapour.

Suggest what the main feature of the infrared spectrum of water would be, giving an appropriate wavenumber range.

.....
.....
..... [2]

(f) A sample of Earth's air contains 0.0014% water vapour. Calculate the proportion, in ppm, of the Earth's air sample that is made from water vapour containing a deuterium atom.

answer = ppm [2]

PLEASE DO NOT WRITE ON THIS PAGE



Copyright Information

OCR is committed to seeking permission to reproduce all third-party content that it uses in its assessment materials. OCR has attempted to identify and contact all copyright holders whose work is used in this paper. To avoid the issue of disclosure of answer-related information to candidates, all copyright acknowledgements are reproduced in the OCR Copyright Acknowledgements Booklet. This is produced for each series of examinations, is given to all schools that receive assessment material and is freely available to download from our public website (www.ocr.org.uk) after the live examination series.

If OCR has unwittingly failed to correctly acknowledge or clear any third-party content in this assessment material, OCR will be happy to correct its mistake at the earliest possible opportunity.

For queries or further information please contact the Copyright Team, First Floor, 9 Hills Road, Cambridge CB2 1GE.

OCR is part of the Cambridge Assessment Group; Cambridge Assessment is the brand name of University of Cambridge Local Examinations Syndicate (UCLES), which is itself a department of the University of Cambridge.