

Please check the examination details below before entering your candidate information

Candidate surname

Other names

**Pearson Edexcel
Level 3 GCE**

Centre Number

--	--	--	--	--

Candidate Number

--	--	--	--	--

Tuesday 2 June 2020

Afternoon (Time: 1 hour 45 minutes)

Paper Reference **9CH0/01**

Chemistry

Advanced

Paper 1: Advanced Inorganic and Physical Chemistry

**Candidates must have: Scientific calculator
Data Booklet
Ruler**

Total Marks

Instructions

- Use **black** ink or **black** ball-point pen.
- **Fill in the boxes** at the top of this page with your name, centre number and candidate number.
- Answer **all** questions.
- Answer the questions in the spaces provided
– *there may be more space than you need.*

Information

- The total mark for this paper is 90.
- The marks for **each** question are shown in brackets
– *use this as a guide as to how much time to spend on each question.*
- For the question marked with an **asterisk** (*), marks will be awarded for your ability to structure your answer logically showing the points that you make are related or follow on from each other where appropriate.
- A Periodic Table is printed on the back cover of this paper.

Advice

- Read each question carefully before you start to answer it.
- Show all your working in calculations and include units where appropriate.
- Check your answers if you have time at the end.

Turn over ►

P62668A

©2020 Pearson Education Ltd.

1/1/1/1/1




Pearson

Answer ALL questions.

Some questions must be answered with a cross . If you change your mind about an answer, put a line through the box and then mark your new answer with a cross .

1 (a) Which equation shows the third ionisation energy of aluminium?

(1)

- A $\text{Al(g)} \rightarrow \text{Al}^{3+}(\text{g}) + 3\text{e}^{-}$
- B $\text{Al}^{2+}(\text{g}) \rightarrow \text{Al}^{3+}(\text{g}) + \text{e}^{-}$
- C $\text{Al}^{3+}(\text{g}) + 3\text{e}^{-} \rightarrow \text{Al(g)}$
- D $\text{Al}^{3+}(\text{g}) + \text{e}^{-} \rightarrow \text{Al}^{2+}(\text{g})$

(b) Which element in this table is in Group 2?

Element	Ionisation energy / kJ mol^{-1}			
	First	Second	Third	Fourth
W	1086	2353	4621	6223
X	653	1592	2987	4740
Y	590	1145	4912	6474
Z	496	4563	6913	9544

(1)

- A W
- B X
- C Y
- D Z



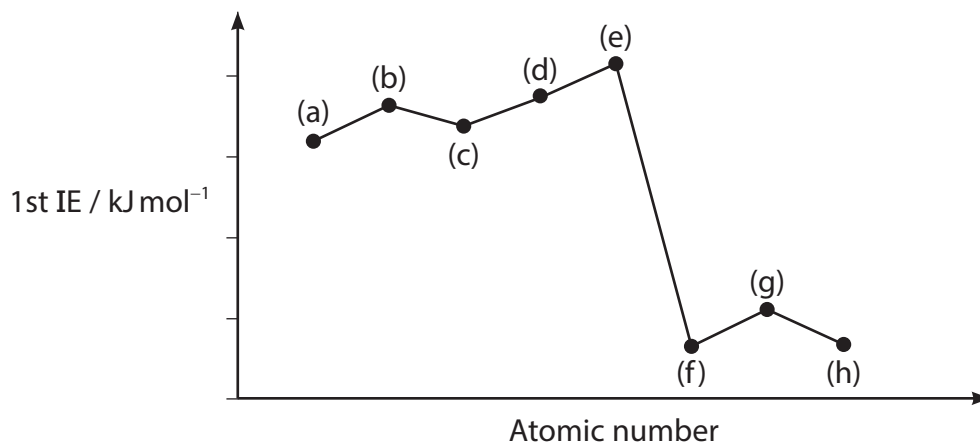
DO NOT WRITE IN THIS AREA

DO NOT WRITE IN THIS AREA

DO NOT WRITE IN THIS AREA

(c) The graph shows the first ionisation energies (IE) of eight successive elements from the first 20 elements in the Periodic Table.

Which letter represents the first ionisation energy of oxygen?



(1)

- A** (a)
- B** (b)
- C** (c)
- D** (h)

(d) Give the formula of a stable **ion** that is isoelectronic with the magnesium ion, Mg^{2+} .

(1)



2 This question is about acids and bases.

(a) What is the order of **decreasing** pH for 0.100 mol dm⁻³ solutions of these three acids? (1)

- A CH₃COOH > CH₂ClCOOH > HCl
- B HCl > CH₃COOH > CH₂ClCOOH
- C CH₂ClCOOH > CH₃COOH > HCl
- D HCl > CH₂ClCOOH > CH₃COOH

(b) A solution of methanoic acid, HCOOH, has a concentration of 0.240 mol dm⁻³ and a pH of 2.20.

Calculate the value of pK_a for methanoic acid.

(3)

(c) Which of these mixtures would form a buffer solution with a pH **below** 7? (1)

- A NaOH(aq) and excess HCl(aq)
- B NaOH(aq) and excess CH₃COOH(aq)
- C excess NaOH(aq) and HCl(aq)
- D excess NaOH(aq) and CH₃COOH(aq)



(d) Bromothymol blue, methyl orange and phenolphthalein are indicators used in titrations.

Which, if any, of these indicators could be used for a titration of ammonia, $\text{NH}_3(\text{aq})$, with ethanoic acid, $\text{CH}_3\text{COOH}(\text{aq})$?

(1)

- A bromothymol blue
- B methyl orange
- C phenolphthalein
- D none of these three indicators

(Total for Question 2 = 6 marks)



DO NOT WRITE IN THIS AREA

DO NOT WRITE IN THIS AREA

DO NOT WRITE IN THIS AREA

3 This question is about transition metals and transition metal complexes.

(a) Describe the bonding in the element chromium and use your answer to justify why it has such a high melting temperature.

You may find it helpful to draw a labelled diagram.

(4)

.....

.....

.....

.....

.....

.....

.....

(b) When chromium(III) sulfate dissolves in water, a green solution containing the $[\text{Cr}(\text{H}_2\text{O})_6]^{3+}$ ion forms.

(i) Give the shape of this complex ion.

(1)

.....

(ii) Explain why the chromium complex ion is coloured.

(3)

.....

.....

.....

.....

.....

.....

.....

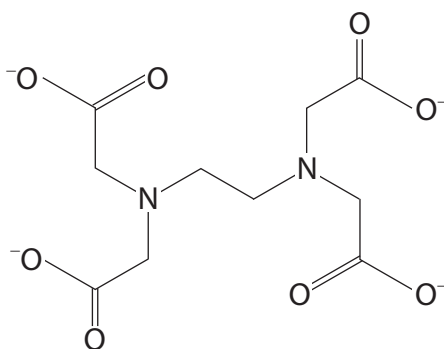
.....

.....

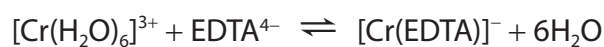
.....



(c) The ligand ethylenediaminetetraacetate, EDTA^{4-} , has the structure shown.



When a solution of EDTA^{4-} is added to a solution of $[\text{Cr}(\text{H}_2\text{O})_6]^{3+}$ ions, a new complex ion is formed.



The equilibrium constant for this equilibrium is $2.51 \times 10^{23} \text{ dm}^3 \text{ mol}^{-1}$.

By considering the equilibrium for this reaction and changes in entropy, comment on the value of the equilibrium constant. No calculations are required.

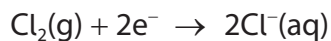
(3)



- (d) Aqueous vanadium(II) chloride, $\text{VCl}_2(\text{aq})$, can be oxidised by bubbling gaseous chlorine, $\text{Cl}_2(\text{g})$, through the solution in the absence of air.

40.0 cm^3 of $0.100 \text{ mol dm}^{-3}$ VCl_2 solution was oxidised by 144 cm^3 of chlorine gas, at room temperature and pressure (r.t.p.).

The chlorine was reduced to chloride ions, according to the half-equation



[Molar volume of a gas at r.t.p. = $24.0 \text{ dm}^3 \text{ mol}^{-1}$]

- (i) Use these data to calculate the final oxidation state of vanadium.
You **must** show your working.

(5)

- (ii) State the initial and final colours you would see as the chlorine bubbles through the aqueous vanadium(II) chloride, $\text{VCl}_2(\text{aq})$.

(2)

.....

.....

(Total for Question 3 = 18 marks)



DO NOT WRITE IN THIS AREA

DO NOT WRITE IN THIS AREA

DO NOT WRITE IN THIS AREA

BLANK PAGE



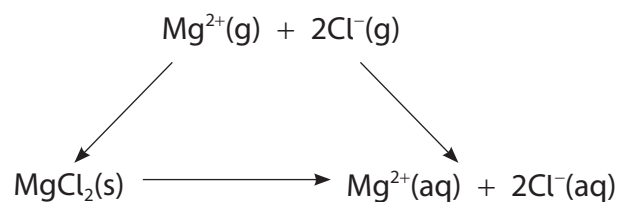
4 This question is about dissolving different compounds.

(a) Which of these compounds is the most soluble in water?

(1)

- A barium sulfate
- B calcium sulfate
- C magnesium sulfate
- D strontium sulfate

(b) What is the value, in kJ mol^{-1} , for the standard enthalpy change of solution of magnesium chloride?



$$\text{Lattice energy MgCl}_2(\text{s}) = -2526 \text{ kJ mol}^{-1}$$

$$\text{Hydration enthalpy of Cl}^{-}(\text{g}) = -381 \text{ kJ mol}^{-1}$$

$$\text{Hydration enthalpy of Mg}^{2+}(\text{g}) = -1921 \text{ kJ mol}^{-1}$$

(1)

- A +157
- B -157
- C +224
- D -224



DO NOT WRITE IN THIS AREA

DO NOT WRITE IN THIS AREA

DO NOT WRITE IN THIS AREA

Handwriting practice area with 20 horizontal dotted lines.

(Total for Question 4 = 8 marks)



P 6 2 6 6 8 A 0 1 3 2 4

5 This question is about the chemistry of hydrated magnesium nitrate, $\text{Mg}(\text{NO}_3)_2 \cdot x\text{H}_2\text{O}$.

(a) Group 2 nitrates decompose when heated.

(i) State **two** observations you would see when hydrated magnesium nitrate is heated. (2)

.....

.....

.....

(ii) Explain the trend in thermal stability of Group 2 nitrates. (3)

.....

.....

.....

.....

.....

.....

.....

.....

.....

.....

.....

(b) In an experiment, a sample of hydrated magnesium nitrate, $\text{Mg}(\text{NO}_3)_2 \cdot x\text{H}_2\text{O}$, with a mass of 0.765 g, was dissolved in water and reacted with an excess of sodium hydroxide solution, $\text{NaOH}(\text{aq})$. The precipitate of magnesium hydroxide, $\text{Mg}(\text{OH})_2$, produced was removed and dried. The mass of the dried sample was 0.174 g.

(i) Draw dot-and-cross diagrams for the ions in magnesium hydroxide. Show the outer electrons only. (2)



- (ii) Use the experimental data to calculate the value for x in the formula $\text{Mg}(\text{NO}_3)_2 \cdot x\text{H}_2\text{O}$.
You **must** show all your working.

(5)

DO NOT WRITE IN THIS AREA

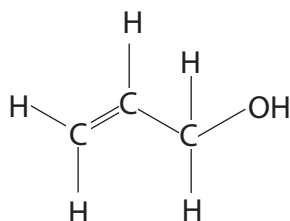
DO NOT WRITE IN THIS AREA

DO NOT WRITE IN THIS AREA

(Total for Question 5 = 12 marks)



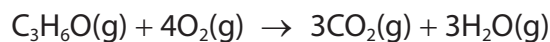
6 Prop-2-en-1-ol is an unsaturated alcohol with the structure shown.



- (a) A student planned to use bond enthalpy data to calculate a value for the enthalpy change of combustion of prop-2-en-1-ol.
- (i) When researching the bond enthalpy data, the student claimed that it was not necessary to find the value for the C=C bond as they could use the value for a C–C bond and multiply it by two. Explain why the student is **incorrect**.

(2)

- (ii) Calculate a value for the enthalpy of combustion of prop-2-en-1-ol using the data shown.



Bond	C–C	C=C	C–O	C=O	O–H	C–H	O=O
Bond enthalpy / kJ mol^{-1}	347	612	358	805	464	413	498

(3)



(iii) Explain, in terms of entropy, why the combustion of prop-2-en-1-ol is always feasible in the gaseous state.

(2)

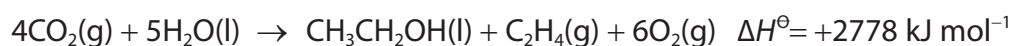
.....

.....

.....

.....

(b) Chemists are researching a process to make ethanol and ethene directly from carbon dioxide and water.



	$\text{CO}_2(\text{g})$	$\text{H}_2\text{O}(\text{l})$	$\text{CH}_3\text{CH}_2\text{OH}(\text{l})$	$\text{C}_2\text{H}_4(\text{g})$	$\text{O}_2(\text{g})$
$S^\ominus / \text{J K}^{-1} \text{ mol}^{-1}$	213.6	69.9	160.7	219.5	205.0

Calculate $\Delta S^\ominus_{\text{total}}$ for the reaction and hence determine whether the reaction is feasible under standard conditions.

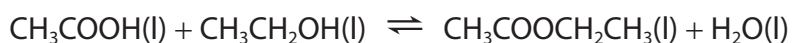
(5)

(Total for Question 6 = 12 marks)



P 6 2 6 6 8 A 0 1 7 2 4

- 7 A mixture of ethanoic acid, ethanol and a catalyst was left for several days to reach equilibrium.



The equilibrium constant, K_c , **under these conditions**, was 0.28.

- (a) (i) Write the expression for the equilibrium constant, K_c . (1)

- (ii) The initial amounts of ethanol and ethanoic acid used were 1.2 mol of each reactant.

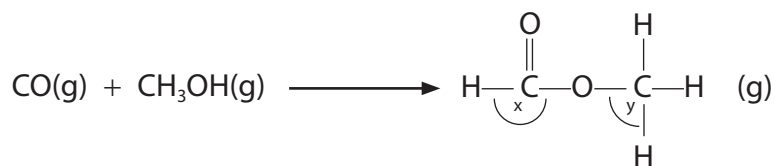
Use this information, your expression for the equilibrium constant, K_c , and the value for K_c , to find the amounts of each product at equilibrium, in moles. (3)

Amount of $\text{CH}_3\text{COOCH}_2\text{CH}_3$ =

Amount of H_2O =



- (b) Another ester, methyl methanoate, can be formed by the reaction between methanol and carbon monoxide in the gaseous phase.



- (i) The two O–C–H bond angles, x and y, in the ester are approximately (1)

- A 180° and 90°
 B 120° and 90°
 C 120° and 109.5°
 D 109.5° and 109.5°

- (ii) The reaction often forms an equilibrium mixture.

Which could be the units for the equilibrium constant, K_p ?

(1)

- A mol dm⁻³
 B dm³ mol⁻¹
 C atm
 D atm⁻¹

- (iii) Describe what effect, if any, increasing the pressure would have on the equilibrium constant, K_p . Justify your answer.

(2)

.....

.....

.....

.....

.....

.....

.....

.....

(Total for Question 7 = 8 marks)

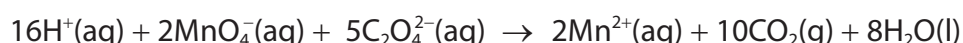


- 8 Tablets containing potassium manganate(VII), KMnO_4 , are dissolved in water forming an antiseptic solution to treat skin conditions. The manufacturers claim that each tablet contains 400 mg of KMnO_4 .

To check the claim, the titration procedure outlined was carried out.

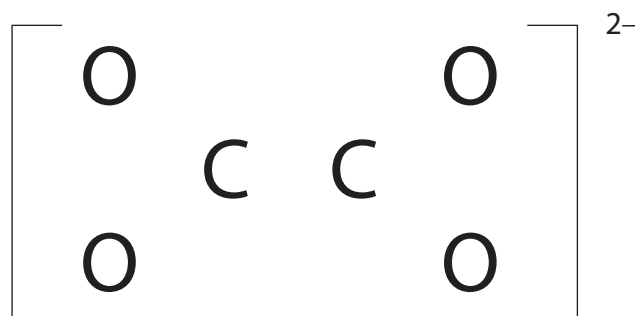
- Five tablets were dissolved in distilled water to make 100.0 cm^3 of solution.
- Some of the KMnO_4 solution was used to fill a burette.
- 25.0 cm^3 of sodium ethanedioate solution, $\text{Na}_2\text{C}_2\text{O}_4(\text{aq})$, of concentration $0.200 \text{ mol dm}^{-3}$, was added to a conical flask and warmed.
- Sulfuric acid, of concentration 2 mol dm^{-3} , was also added to the conical flask.
- The KMnO_4 solution was added to the flask from the burette, until the end-point.

The equation for the reaction between MnO_4^- ions from the KMnO_4 and $\text{C}_2\text{O}_4^{2-}$ ions from the sodium ethanedioate solution is shown.



- (a) Give the colour **change** at the end-point of the titration. (1)

- (b) (i) Complete the dot-and-cross diagram for the ethanedioate ion. Show the outer electrons only. (2)



- (ii) Determine the oxidation number of carbon in the ethanedioate ion, $\text{C}_2\text{O}_4^{2-}$. (1)

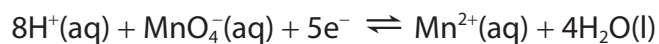
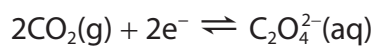


(c) Give the reason why sulfuric acid was also added to the conical flask.

(1)

(d) This redox reaction could be used in an electrochemical cell.

The cell half-equations are



Write a cell diagram for this cell using the conventional representation.

(2)

DO NOT WRITE IN THIS AREA

DO NOT WRITE IN THIS AREA

DO NOT WRITE IN THIS AREA



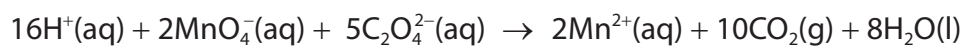
(e) The results of the titration are shown.

Run	Trial	1	2	3
Final volume / cm ³	17.50	34.10	17.20	34.10
Initial volume / cm ³	0.00	17.30	0.00	17.20
Titre / cm ³	17.50		17.20	
Concordant titres (✓)				
Mean titre / cm ³				

(i) Complete the table.

(2)

(ii) The equation for the reaction between MnO_4^- ions from the KMnO_4 and $\text{C}_2\text{O}_4^{2-}$ ions from the sodium ethanedioate solution is shown.



Use this equation and your mean titre from (e)(i) to calculate the mass, in mg, of KMnO_4 in **one** tablet.

Give your answer to an appropriate number of significant figures.

(5)



(iii) A textbook suggested the conical flask should be heated during the titration, as the reaction between the MnO_4^- ions and the $\text{C}_2\text{O}_4^{2-}$ ions is slow.

Use these electrode potentials and your knowledge of homogeneous catalysis to deduce why the heating is very important at the start of the titration, but less important as the titration proceeds. Justify your answer. You may include equations in your justification.

Electrode system	E^\ominus / V
$2\text{CO}_2(\text{g}) + 2\text{e}^- \rightleftharpoons \text{C}_2\text{O}_4^{2-}(\text{aq})$	+0.64
$\text{Mn}^{3+}(\text{aq}) + \text{e}^- \rightleftharpoons \text{Mn}^{2+}(\text{aq})$	+1.49
$\text{MnO}_4^-(\text{aq}) + 8\text{H}^+(\text{aq}) + 5\text{e}^- \rightleftharpoons \text{Mn}^{2+}(\text{aq}) + 4\text{H}_2\text{O}(\text{l})$	+1.51

(4)

(Total for Question 8 = 18 marks)

TOTAL FOR PAPER = 90 MARKS



