

**ADVANCED SUBSIDIARY GCE
MATHEMATICS (MEI)**

Introduction to Advanced Mathematics (C1)

4751

QUESTION PAPER

Candidates answer on the printed answer book.

OCR supplied materials:

- Printed answer book 4751
- MEI Examination Formulae and Tables (MF2)

Other materials required:

None

**Monday 10 January 2011
Morning**

Duration: 1 hour 30 minutes

INSTRUCTIONS TO CANDIDATES

These instructions are the same on the printed answer book and the question paper.

- The question paper will be found in the centre of the printed answer book.
- Write your name, centre number and candidate number in the spaces provided on the printed answer book. Please write clearly and in capital letters.
- **Write your answer to each question in the space provided in the printed answer book.** Additional paper may be used if necessary but you must clearly show your candidate number, centre number and question number(s).
- Use black ink. Pencil may be used for graphs and diagrams only.
- Read each question carefully. Make sure you know what you have to do before starting your answer.
- Answer **all** the questions.
- Do **not** write in the bar codes.
- You are **not** permitted to use a calculator in this paper.
- Final answers should be given to a degree of accuracy appropriate to the context.

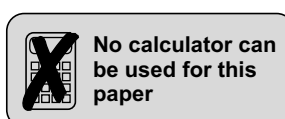
INFORMATION FOR CANDIDATES

This information is the same on the printed answer book and the question paper.

- The number of marks is given in brackets [] at the end of each question or part question on the question paper.
- You are advised that an answer may receive **no marks** unless you show sufficient detail of the working to indicate that a correct method is being used.
- The total number of marks for this paper is **72**.
- The printed answer book consists of **12** pages. The question paper consists of **4** pages. Any blank pages are indicated.

INSTRUCTION TO EXAMS OFFICER / INVIGILATOR

- Do not send this question paper for marking; it should be retained in the centre or destroyed.



Section A (36 marks)

- 1 Find the equation of the line which is parallel to $y = 5x - 4$ and which passes through the point $(2, 13)$. Give your answer in the form $y = ax + b$. [3]
- 2 (i) Write down the value of each of the following.
- (A) 4^{-2} [1]
- (B) 9^0 [1]
- (ii) Find the value of $\left(\frac{64}{125}\right)^{\frac{4}{3}}$. [2]
- 3 Simplify $\frac{(3xy^4)^3}{6x^5y^2}$. [3]
- 4 Solve the inequality $5 - 2x < 0$. [2]
- 5 The volume V of a cone with base radius r and slant height l is given by the formula
- $$V = \frac{1}{3}\pi r^2 \sqrt{l^2 - r^2}.$$
- Rearrange this formula to make l the subject. [4]
- 6 Find the first 3 terms, in ascending powers of x , of the binomial expansion of $(2 - 3x)^5$, simplifying each term. [4]
- 7 (i) Express $\frac{81}{\sqrt{3}}$ in the form 3^k . [2]
- (ii) Express $\frac{5 + \sqrt{3}}{5 - \sqrt{3}}$ in the form $\frac{a + b\sqrt{3}}{c}$, where a , b and c are integers. [3]
- 8 Find the coordinates of the point of intersection of the lines $x + 2y = 5$ and $y = 5x - 1$. [3]

- 9 Fig. 9 shows a trapezium ABCD, with the lengths in centimetres of three of its sides.

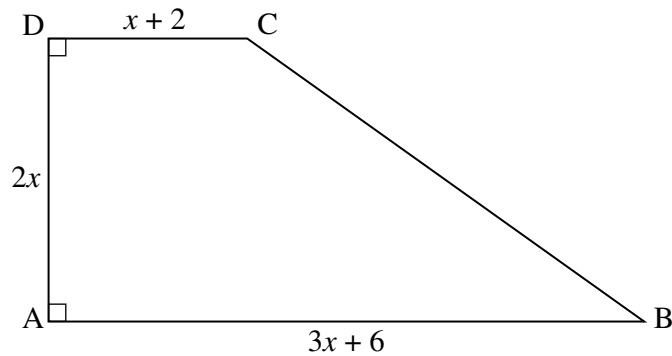


Fig. 9

This trapezium has area 140 cm^2 .

- (i) Show that $x^2 + 2x - 35 = 0$. [2]
- (ii) Hence find the length of side AB of the trapezium. [3]

- 10 Select the best statement from

- $P \Rightarrow Q$
 $P \Leftarrow Q$
 $P \Leftrightarrow Q$
 none of the above

to describe the relationship between P and Q in each of the following cases.

- (i) P: WXYZ is a quadrilateral with 4 equal sides
 Q: WXYZ is a square
- (ii) P: n is an odd integer
 Q: $(n + 1)^2$ is an odd integer
- (iii) P: n is greater than 1 and n is a prime number
 Q: \sqrt{n} is not an integer [3]

Section B (36 marks)

- 11 The points A $(-1, 6)$, B $(1, 0)$ and C $(13, 4)$ are joined by straight lines.
- (i) Prove that the lines AB and BC are perpendicular. [3]
- (ii) Find the area of triangle ABC. [3]
- (iii) A circle passes through the points A, B and C. Justify the statement that AC is a diameter of this circle. Find the equation of this circle. [6]
- (iv) Find the coordinates of the point on this circle that is furthest from B. [1]

- 12** (i) You are given that $f(x) = (2x - 5)(x - 1)(x - 4)$.
- (A) Sketch the graph of $y = f(x)$. [3]
- (B) Show that $f(x) = 2x^3 - 15x^2 + 33x - 20$. [2]
- (ii) You are given that $g(x) = 2x^3 - 15x^2 + 33x - 40$.
- (A) Show that $g(5) = 0$. [1]
- (B) Express $g(x)$ as the product of a linear and quadratic factor. [3]
- (C) Hence show that the equation $g(x) = 0$ has only one real root. [2]
- (iii) Describe fully the transformation that maps $y = f(x)$ onto $y = g(x)$. [2]

13

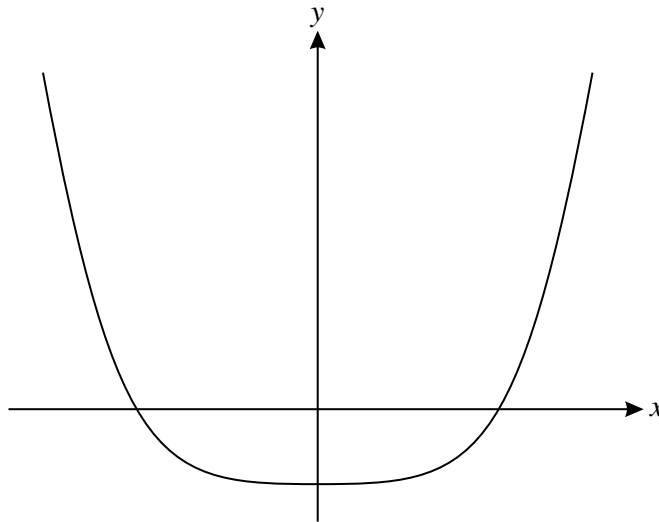


Fig. 13

Fig. 13 shows the curve $y = x^4 - 2$.

- (i) Find the exact coordinates of the points of intersection of this curve with the axes. [3]
- (ii) Find the exact coordinates of the points of intersection of the curve $y = x^4 - 2$ with the curve $y = x^2$. [5]
- (iii) Show that the curves $y = x^4 - 2$ and $y = kx^2$ intersect for all values of k . [2]

Copyright Information

OCR is committed to seeking permission to reproduce all third-party content that it uses in its assessment materials. OCR has attempted to identify and contact all copyright holders whose work is used in this paper. To avoid the issue of disclosure of answer-related information to candidates, all copyright acknowledgements are reproduced in the OCR Copyright Acknowledgements Booklet. This is produced for each series of examinations and is freely available to download from our public website (www.ocr.org.uk) after the live examination series. If OCR has unwittingly failed to correctly acknowledge or clear any third-party content in this assessment material, OCR will be happy to correct its mistake at the earliest possible opportunity. For queries or further information please contact the Copyright Team, First Floor, 9 Hills Road, Cambridge CB2 1GE.

OCR is part of the Cambridge Assessment Group; Cambridge Assessment is the brand name of University of Cambridge Local Examinations Syndicate (UCLES), which is itself a department of the University of Cambridge.