

Please write clearly in block capitals.

Centre number

--	--	--	--	--

Candidate number

--	--	--	--

Surname

Forename(s)

Candidate signature

Level 2 Certificate in Further Mathematics

FURTHER MATHEMATICS

Level 2 Paper 1 Non-Calculator

Monday 20 June 2016

Morning

Time allowed: 1 hour 30 minutes

Materials

For this paper you must have:

- mathematical instruments.
- You must **not** use a calculator.



Instructions

- Use black ink or black ball-point pen. Draw diagrams in pencil.
- Answer **all** questions.
- You must answer the questions in the spaces provided. Do not write outside the box around each page or on blank pages.
- Do all rough work in this book. Cross through any work you do not want to be marked.
- In all calculations, show clearly how you work out your answer.

Information

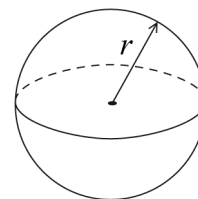
- The marks for questions are shown in brackets.
- The maximum mark for this paper is 70.
- You may ask for more answer paper, graph paper and tracing paper. These must be tagged securely to this answer book.



Formulae Sheet

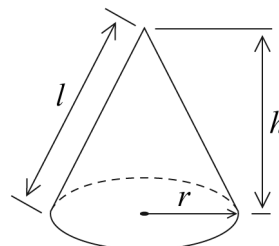
Volume of sphere $= \frac{4}{3}\pi r^3$

Surface area of sphere $= 4\pi r^2$



Volume of cone $= \frac{1}{3}\pi r^2 h$

Curved surface area of cone $= \pi r l$



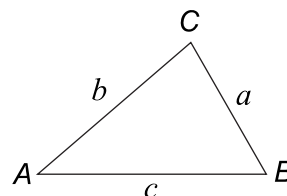
In any triangle ABC

Area of triangle $= \frac{1}{2}ab \sin C$

Sine rule $\frac{a}{\sin A} = \frac{b}{\sin B} = \frac{c}{\sin C}$

Cosine rule $a^2 = b^2 + c^2 - 2bc \cos A$

$$\cos A = \frac{b^2 + c^2 - a^2}{2bc}$$



The Quadratic Equation

The solutions of $ax^2 + bx + c = 0$, where $a \neq 0$, are given by

$$x = \frac{-b \pm \sqrt{(b^2 - 4ac)}}{2a}$$

Trigonometric Identities

$$\tan \theta \equiv \frac{\sin \theta}{\cos \theta} \quad \sin^2 \theta + \cos^2 \theta \equiv 1$$



Answer **all** questions in the spaces provided.

1 $y = x^2(x - 10)$

Work out $\frac{dy}{dx}$

[3 marks]

Answer _____

2 $4 \begin{pmatrix} 1 - 2a \\ a \end{pmatrix} = \begin{pmatrix} b \\ 12 \end{pmatrix}$

Work out the values of a and b .

[3 marks]

$a =$ _____

$b =$ _____

6

Turn over ►



3 The n th term of a sequence is $\frac{3n}{5n+12}$

3 (a) Work out the position of the term that has a value of $\frac{1}{2}$

[2 marks]

Answer _____

3 (b) Write down the limiting value of $\frac{3n}{5n+12}$ as $n \rightarrow \infty$

[1 mark]

Answer _____



4 The equation of a circle is $(x + 5)^2 + (y - 8)^2 = 10$

4 (a) What are the coordinates of the centre of the circle?
Circle your answer.

[1 mark]

(-5, -8)

(-5, 8)

(5, 8)

(5, -8)

4 (b) Write down the radius of the circle.

[1 mark]

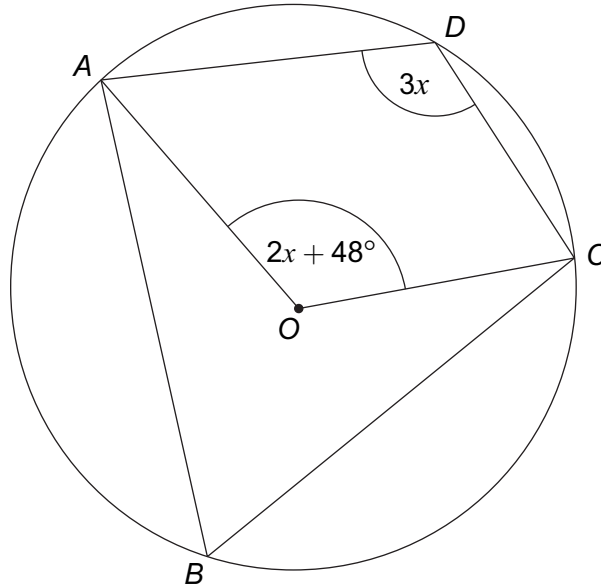
Answer _____

Turn over for the next question



- 5 A, B, C and D are points on a circle, centre O .

Not drawn
accurately



Work out the value of x .

[3 marks]

$x =$ _____ degrees



8 Solve $(3 - \sqrt{x})^{\frac{1}{3}} = -2$

[3 marks]

$x =$ _____

9 Expand and simplify $(x - 5)^3$

[3 marks]

Answer _____



11 $A(1\frac{1}{5}, 3\frac{4}{5})$, $B(2, 1\frac{4}{5})$ and $C(5, 3)$ are points on a coordinate grid.

Show that the line segments AB and BC are perpendicular.

[3 marks]



12 You are given that $x^2 + 6x + 2 \equiv (x + h)^2 + k$

12 (a) Work out the values of h and k .

[2 marks]

$$h = \underline{\hspace{2cm}}$$

$$k = \underline{\hspace{2cm}}$$

12 (b) Write down the coordinates of the minimum point on the curve $y = x^2 + 6x + 2$

[1 mark]

Answer $(\underline{\hspace{1cm}}, \underline{\hspace{1cm}})$

12 (c) Solve the equation $x^2 + 6x + 2 = 0$

Give your answers in the form $a \pm \sqrt{b}$

[1 mark]

Answer $\underline{\hspace{4cm}}$



15

Rationalise the denominator and simplify fully

$$\frac{6}{\sqrt{7} + 2}$$

[3 marks]

Answer _____



18 Factorise fully $x^4 - 81$

[2 marks]

Answer _____

Turn over for the next question

7

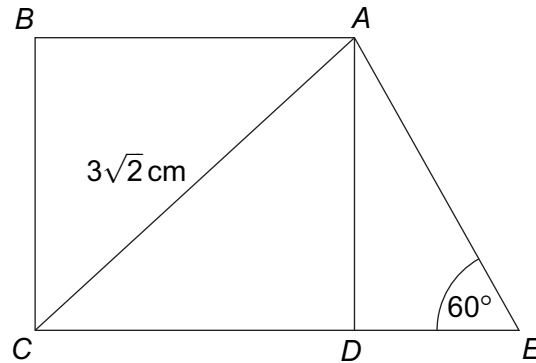
Turn over ►



19

$ABCD$ is a square.
 CDE is a straight line.

AC is $3\sqrt{2}$ cm and angle $DEA = 60^\circ$



Not drawn
accurately

19 (a) Show that the side of the square is 3 cm

[2 marks]

19 (b) Show that the perimeter of trapezium $ABCE$ is $3(3 + \sqrt{3})$ cm

[4 marks]



There are no questions printed on this page

**DO NOT WRITE ON THIS PAGE
ANSWER IN THE SPACES PROVIDED**

Copyright information

For confidentiality purposes, from the November 2015 examination series, acknowledgements of third party copyright material will be published in a separate booklet rather than including them on the examination paper or support materials. This booklet is published after each examination series and is available for free download from www.aqa.org.uk after the live examination series.

Permission to reproduce all copyright material has been applied for. In some cases, efforts to contact copyright-holders may have been unsuccessful and AQA will be happy to rectify any omissions of acknowledgements. If you have any queries please contact the Copyright Team, AQA, Stag Hill House, Guildford, GU2 7XJ.

Copyright © 2016 AQA and its licensors. All rights reserved.

