

**ADVANCED GCE UNIT
MATHEMATICS**

Mechanics 2

WEDNESDAY 20 JUNE 2007

4729/01

Afternoon

Time: 1 hour 30 minutes

Additional Materials: Answer Booklet (8 pages)
List of Formulae (MF1)

INSTRUCTIONS TO CANDIDATES

- Write your name, centre number and candidate number in the spaces provided on the answer booklet.
- Answer **all** the questions.
- Give non-exact numerical answers correct to 3 significant figures unless a different degree of accuracy is specified in the question or is clearly appropriate.
- The acceleration due to gravity is denoted by $g \text{ m s}^{-2}$. Unless otherwise instructed, when a numerical value is needed, use $g = 9.8$.
- You are permitted to use a graphical calculator in this paper.

INFORMATION FOR CANDIDATES

- The number of marks is given in brackets [] at the end of each question or part question.
- The total number of marks for this paper is 72.

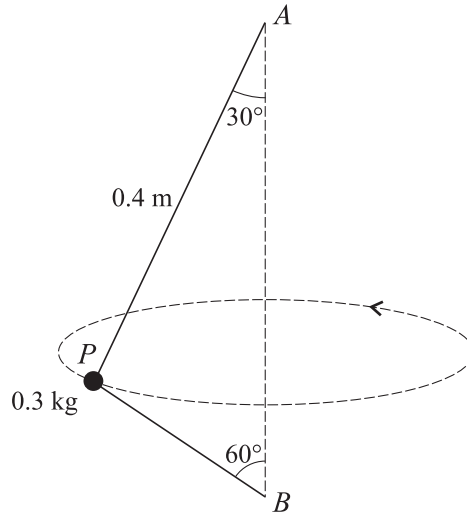
ADVICE TO CANDIDATES

- Read each question carefully and make sure you know what you have to do before starting your answer.
- **You are reminded of the need for clear presentation in your answers.**

This document consists of **4** printed pages.

- 1 A man drags a sack at constant speed in a straight line along horizontal ground by means of a rope attached to the sack. The rope makes an angle of 35° with the horizontal and the tension in the rope is 40 N. Calculate the work done in moving the sack 100 m. [3]
- 2 Calculate the range on a horizontal plane of a small stone projected from a point on the plane with speed 12 m s^{-1} at an angle of elevation of 27° . [4]
- 3 A rocket of mass 250 kg is moving in a straight line in space. There is no resistance to motion, and the mass of the rocket is assumed to be constant. With its motor working at a constant rate of 450 kW the rocket's speed increases from 100 m s^{-1} to 150 m s^{-1} in a time t seconds.
- (i) Calculate the value of t . [4]
- (ii) Calculate the acceleration of the rocket at the instant when its speed is 120 m s^{-1} . [4]
- 4 A ball is projected from a point O on the edge of a vertical cliff. The horizontal and vertically upward components of the initial velocity are 7 m s^{-1} and 21 m s^{-1} respectively. At time t seconds after projection the ball is at the point (x, y) referred to horizontal and vertically upward axes through O . Air resistance may be neglected.
- (i) Express x and y in terms of t , and hence show that $y = 3x - \frac{1}{10}x^2$. [5]
- The ball hits the sea at a point which is 25 m below the level of O .
- (ii) Find the horizontal distance between the cliff and the point where the ball hits the sea. [3]
- 5 A cyclist and her bicycle have a combined mass of 70 kg. The cyclist ascends a straight hill AB of constant slope, starting from rest at A and reaching a speed of 4 m s^{-1} at B . The level of B is 6 m above the level of A . For the cyclist's motion from A to B , find
- (i) the increase in kinetic energy, [2]
- (ii) the increase in gravitational potential energy. [2]
- During the ascent the resistance to motion is constant and has magnitude 60 N. The work done by the cyclist in moving from A to B is 8000 J.
- (iii) Calculate the distance AB . [4]

6



A particle P of mass 0.3 kg is attached to one end of each of two light inextensible strings. The other end of the longer string is attached to a fixed point A and the other end of the shorter string is attached to a fixed point B , which is vertically below A . AP makes an angle of 30° with the vertical and is 0.4 m long. PB makes an angle of 60° with the vertical. The particle moves in a horizontal circle with constant angular speed and with both strings taut (see diagram). The tension in the string AP is 5 N .

Calculate

- (i) the tension in the string PB , [3]
- (ii) the angular speed of P , [3]
- (iii) the kinetic energy of P . [3]

7 Two small spheres A and B , with masses 0.3 kg and $m \text{ kg}$ respectively, lie at rest on a smooth horizontal surface. A is projected directly towards B with speed 6 m s^{-1} and hits B . The direction of motion of A is reversed in the collision. The speeds of A and B after the collision are 1 m s^{-1} and 3 m s^{-1} respectively. The coefficient of restitution between A and B is e .

- (i) Show that $m = 0.7$. [2]
- (ii) Find e . [2]

B continues to move at 3 m s^{-1} and strikes a vertical wall at right angles. The coefficient of restitution between B and the wall is f .

- (iii) Find the range of values of f for which there will be a second collision between A and B . [2]
- (iv) Find, in terms of f , the magnitude of the impulse that the wall exerts on B . [3]
- (v) Given that $f = \frac{3}{4}$, calculate the final speeds of A and B , correct to 1 decimal place. [7]

[Question 8 is printed overleaf.]

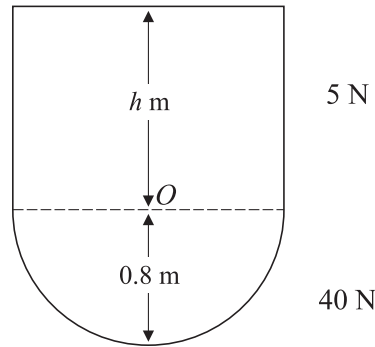


Fig. 1

An object consists of a uniform solid hemisphere of weight 40 N and a uniform solid cylinder of weight 5 N. The cylinder has height h m. The solids have the same base radius 0.8 m and are joined so that the hemisphere's plane face coincides with one of the cylinder's faces. The centre of the common face is the point O (see Fig. 1). The centre of mass of the object lies inside the hemisphere and is at a distance of 0.2 m from O .

(i) Show that $h = 1.2$.

[6]

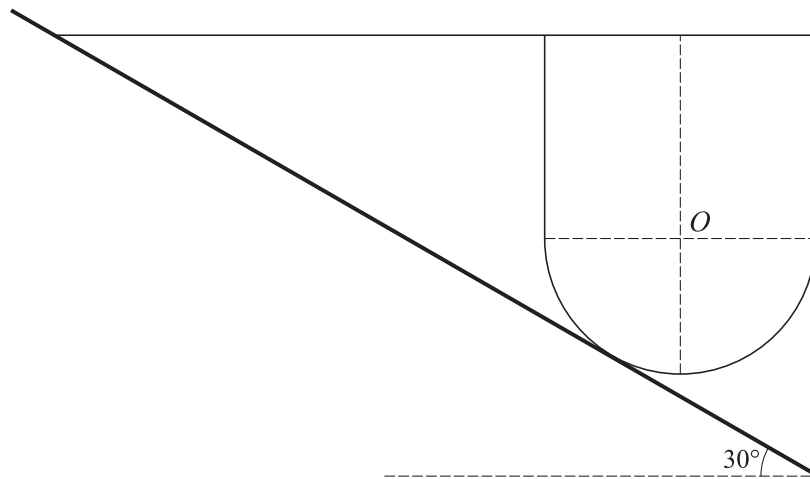


Fig. 2

One end of a light inextensible string is attached to a point on the circumference of the upper face of the cylinder. The string is horizontal and its other end is tied to a fixed point on a rough plane. The object rests in equilibrium on the plane with its axis of symmetry vertical. The plane makes an angle of 30° with the horizontal (see Fig. 2). The tension in the string is T N and the frictional force acting on the object is F N.

(ii) By taking moments about O , express F in terms of T .

[4]

(iii) Find another equation connecting T and F . Hence calculate the tension and the frictional force.

[6]

Permission to reproduce items where third-party owned material protected by copyright is included has been sought and cleared where possible. Every reasonable effort has been made by the publisher (OCR) to trace copyright holders, but if any items requiring clearance have unwittingly been included, the publisher will be pleased to make amends at the earliest possible opportunity.

OCR is part of the Cambridge Assessment Group. Cambridge Assessment is the brand name of University of Cambridge Local Examinations Syndicate (UCLES), which is itself a department of the University of Cambridge.