

Thursday 31 May 2012 – Morning

AS GCE MATHEMATICS

4728 Mechanics 1

QUESTION PAPER

Candidates answer on the Printed Answer Book.

OCR supplied materials:

- Printed Answer Book 4728
- List of Formulae (MF1)

Other materials required:

- Scientific or graphical calculator

Duration: 1 hour 30 minutes



INSTRUCTIONS TO CANDIDATES

These instructions are the same on the Printed Answer Book and the Question Paper.

- The Question Paper will be found in the centre of the Printed Answer Book.
- Write your name, centre number and candidate number in the spaces provided on the Printed Answer Book. Please write clearly and in capital letters.
- **Write your answer to each question in the space provided in the Printed Answer Book.** Additional paper may be used if necessary but you must clearly show your candidate number, centre number and question number(s).
- Use black ink. HB pencil may be used for graphs and diagrams only.
- Answer **all** the questions.
- Read each question carefully. Make sure you know what you have to do before starting your answer.
- Do **not** write in the bar codes.
- You are permitted to use a scientific or graphical calculator in this paper.
- Give non-exact numerical answers correct to 3 significant figures unless a different degree of accuracy is specified in the question or is clearly appropriate.
- The acceleration due to gravity is denoted by $g \text{ ms}^{-2}$. Unless otherwise instructed, when a numerical value is needed, use $g = 9.8$.

INFORMATION FOR CANDIDATES

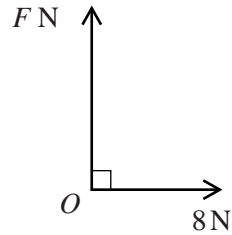
This information is the same on the Printed Answer Book and the Question Paper.

- The number of marks is given in brackets [] at the end of each question or part question on the Question Paper.
- **You are reminded of the need for clear presentation in your answers.**
- The total number of marks for this paper is **72**.
- The Printed Answer Book consists of **12** pages. The Question Paper consists of **4** pages. Any blank pages are indicated.

INSTRUCTION TO EXAMS OFFICER/INVIGILATOR

- Do not send this Question Paper for marking; it should be retained in the centre or recycled. Please contact OCR Copyright should you wish to re-use this document.

1



Two perpendicular forces of magnitudes F N and 8 N act at a point O (see diagram). Their resultant has magnitude 17 N.

- (i) Calculate F and find the angle which the resultant makes with the 8 N force. [4]

A third force of magnitude E N, acting in the same plane as the two original forces, is now applied at the point O . The three forces of magnitudes E N, F N and 8 N are in equilibrium.

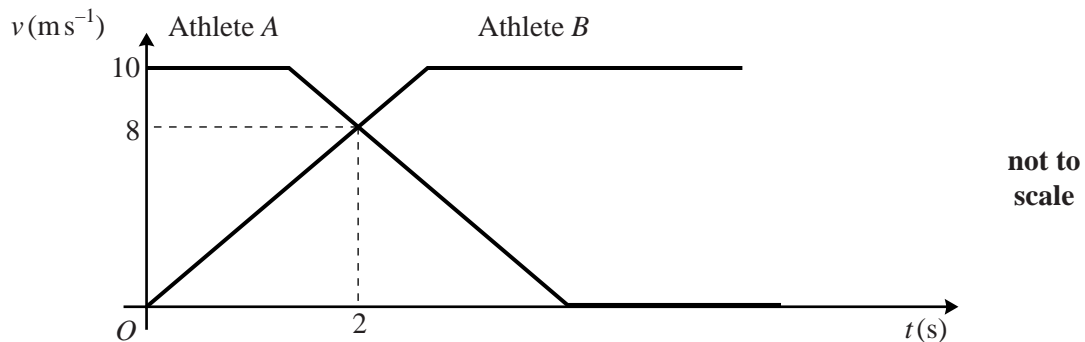
- (ii) State the value of E and the angle between the directions of the E N and 8 N forces. [2]

2 A particle is projected vertically upwards with speed 7 m s^{-1} from a point on the ground.

- (i) Find the speed of the particle and its distance above the ground 0.4 s after projection. [4]

- (ii) Find the total distance travelled by the particle in the first 0.9 s after projection. [4]

3



The diagram shows the (t, v) graphs for two athletes, A and B , who run in the same direction in the same straight line while they exchange the baton in a relay race. A runs with constant velocity 10 m s^{-1} until he decelerates at 5 m s^{-2} and subsequently comes to rest. B has constant acceleration from rest until reaching his constant speed of 10 m s^{-1} . The baton is exchanged 2 s after B starts running, when both athletes have speed 8 m s^{-1} and B is 1 m ahead of A .

- (i) Find the value of t at which A starts to decelerate. [2]

- (ii) Calculate the distance between A and B at the instant when B starts to run. [5]

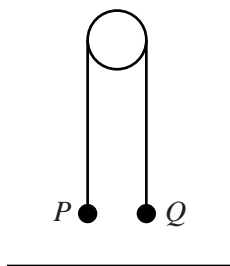
- 4 A block B of weight 28 N is pulled at constant speed across a rough horizontal surface by a force of magnitude 14 N inclined at 30° above the horizontal.

(i) Show that the coefficient of friction between the block and the surface is 0.577 , correct to 3 significant figures. [4]

The 14 N force is suddenly removed, and the block decelerates, coming to rest after travelling a further 3.2 m .

(ii) Calculate the speed of the block at the instant the 14 N force was removed. [6]

5



Particles P and Q , of masses 0.4 kg and $m\text{ kg}$ respectively, are joined by a light inextensible string which passes over a smooth pulley. The particles are released from rest at the same height above a horizontal surface; the string is taut and the portions of the string not in contact with the pulley are vertical (see diagram). Q begins to descend with acceleration 2.45 m s^{-2} and reaches the surface 0.3 s after being released. Subsequently, Q remains at rest and P never reaches the pulley.

(i) Calculate the tension in the string while Q is in motion. [3]

(ii) Calculate the momentum lost by Q when it reaches the surface. [5]

(iii) Calculate the greatest height of P above the surface. [5]

[Questions 6 and 7 are printed overleaf.]

Copyright Information

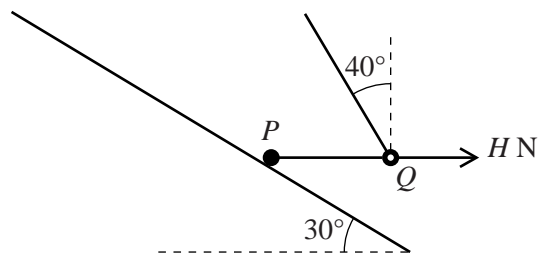
OCR is committed to seeking permission to reproduce all third-party content that it uses in its assessment materials. OCR has attempted to identify and contact all copyright holders whose work is used in this paper. To avoid the issue of disclosure of answer-related information to candidates, all copyright acknowledgements are reproduced in the OCR Copyright Acknowledgements Booklet. This is produced for each series of examinations and is freely available to download from our public website (www.ocr.org.uk) after the live examination series.

If OCR has unwittingly failed to correctly acknowledge or clear any third-party content in this assessment material, OCR will be happy to correct its mistake at the earliest possible opportunity.

For queries or further information please contact the Copyright Team, First Floor, 9 Hills Road, Cambridge CB2 1GE.

OCR is part of the Cambridge Assessment Group; Cambridge Assessment is the brand name of University of Cambridge Local Examinations Syndicate (UCLES), which is itself a department of the University of Cambridge.

6



A particle P lies on a slope inclined at 30° to the horizontal. P is attached to one end of a taut light inextensible string which passes through a small smooth ring Q of mass m kg. The portion PQ of the string is horizontal and the other portion of the string is inclined at 40° to the vertical. A horizontal force of magnitude HN , acting away from P , is applied to Q (see diagram). The tension in the string is 6.4 N, and the string is in the vertical plane containing the line of greatest slope on which P lies. Both P and Q are in equilibrium.

(i) Calculate m . [2]

(ii) Calculate H . [2]

(iii) Given that the weight of P is 32 N, and that P is in limiting equilibrium, show that the coefficient of friction between P and the slope is 0.879 , correct to 3 significant figures. [6]

Q and the string are now removed.

(iv) Determine whether P remains in equilibrium. [3]

7



The diagram shows two particles P and Q , of masses 0.2 kg and 0.3 kg respectively, which move on a horizontal surface in the same direction along a straight line. A stationary particle R of mass 1.5 kg also lies on this line. P and Q collide and coalesce to form a combined particle C . Immediately before this collision P has velocity 4 m s^{-1} and Q has velocity 2.5 m s^{-1} .

(i) Calculate the velocity of C immediately after this collision. [3]

At time t s after this collision the velocity $v \text{ m s}^{-1}$ of C is given by $v = V_0 - 3t^2$ for $0 < t \leq 0.3$. C strikes R when $t = 0.3$.

(ii) (a) State the value of V_0 . [1]

(b) Calculate the distance C moves before it strikes R . [4]

(c) Find the acceleration of C immediately before it strikes R . [3]

Immediately after C strikes R , the particles have equal speeds but move in opposite directions.

(iii) Find the speed of C immediately after it strikes R . [4]